



Language, Literacy & Numeracy Indicator (LLN)

Date:

Personal details

Title: Family name: Given names: Preferred name:

Address:


Phone - Home: Mobile: D.O.B / / Email:

Please complete the following tasks.

<i>Do you think you will need help with?</i>	Reading?	<input type="checkbox"/> Yes	<input type="checkbox"/> Sometimes	<input type="checkbox"/> No
	Writing?	<input type="checkbox"/> Yes	<input type="checkbox"/> Sometimes	<input type="checkbox"/> No
	Maths/Numeracy?	<input type="checkbox"/> Yes	<input type="checkbox"/> Sometimes	<input type="checkbox"/> No
	Using a dictionary?	<input type="checkbox"/> Yes	<input type="checkbox"/> Sometimes	<input type="checkbox"/> No
	Using a calculator?	<input type="checkbox"/> Yes	<input type="checkbox"/> Sometimes	<input type="checkbox"/> No
	Using a computer?	<input type="checkbox"/> Yes	<input type="checkbox"/> Sometimes	<input type="checkbox"/> No
	Compose an email?	<input type="checkbox"/> Yes	<input type="checkbox"/> Sometimes	<input type="checkbox"/> No
	Read a work roster?	<input type="checkbox"/> Yes	<input type="checkbox"/> Sometimes	<input type="checkbox"/> No

Please list any areas where you think you might need some help.

ACTIVITY 1 - Describe the picture below (at least 7 lines)





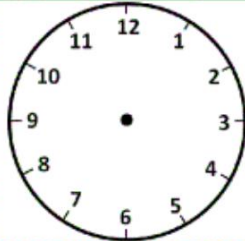

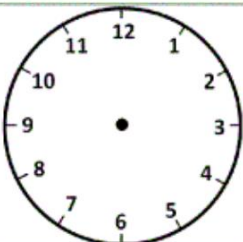
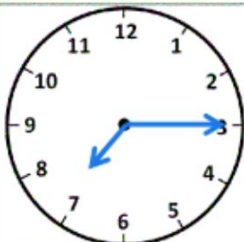
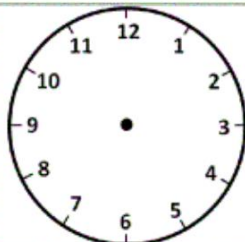

ACTIVITY 2 – Please write at least 7 lines on why you would like to complete this course and what opportunities will it give to you.

ACTIVITY 3 – Answer the question below (you may use a calculator)






Spike the dog eats a can of dog food everyday which costs \$1.20. How much does it cost to feed him for a week?	
If I had \$65 to share evenly between five people. How much would each person get?	
Tim collected an average of eight dollars a shift in tips when he works in the bar. If he works nine shifts how much money in tips would he earn?	
Seven people share \$8270 in X-lotto. How much does each person get?	
Dave ordered 12 large pizzas for a party. Each cost \$11.49. How much did it cost in total?	

ACTIVITY 4 – Reading and Writing the Time

For each clock, please either draw the hands according to the time given, or write the time being shown on the clock. The first one has been completed for you.

			
2:20		4:25	
			
12:30		9:35	

ACTIVITY 5 – Look at the safety signs below and provide a description of what they mean.

ACTIVITY 7 – Read the security log book below

Location: <u>Signature Enterprises, 13 George Street, Wollongong</u>			
(Note: include on and off duty, key handover, briefing on new instructions)			
Date	Time	Security Officer	Report Incident
13/4	1520	M. Smith	Sign in
	1720		Collected keys from Peter Delaney. Commenced patrol of George Street and Brown Road sides (fire escape door at George Street stairway open). Hydraulics not working to make door close. Secured exit, called Peter to arrange repairs.
	1730		Forklift left unattended at front office, blocking access. Went inside office to talk to driver.

What is the name of the security officer?	
What time did the security officer sign in?	
In your own words, what happened at 5:30pm?	
Who will repair the door?	

Thank you!

End of Language Literacy and Numeracy Assessment.